

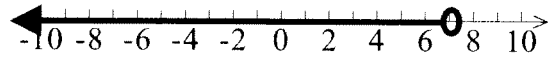
Writing Inequalities

Name _____

Date _____

Directions: Write the inequalities which represent the given graph.


1. _____



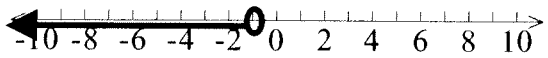
2. _____




3. _____



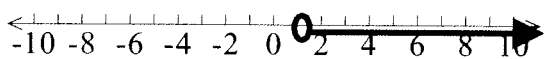
4. _____



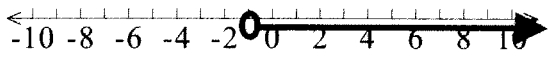
5. _____



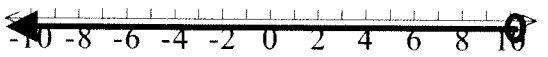
6. _____




7. _____



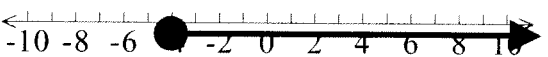
8. _____



9. _____



10. _____



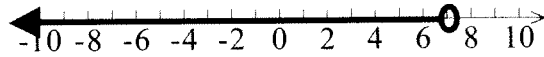
Writing Inequalities

Name ANSWER KEY

Date _____

Directions: Write the inequalities which represent the given graph.

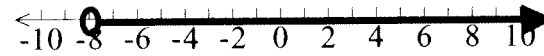
1. $x < 7$



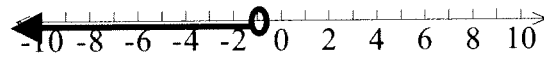
2. $x \geq -2$



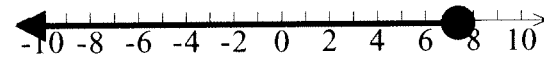
3. $x > -8$



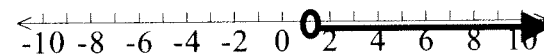
4. $x < -1$



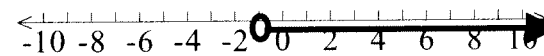
5. $x \leq 7$




6. $x > 1$



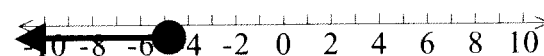
7. $x > -1$



8. $x < 10$



9. $x \leq -5$



10. $x \geq -4$

