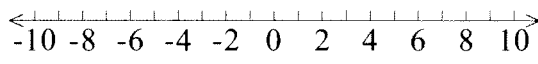
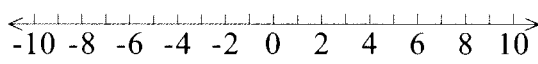
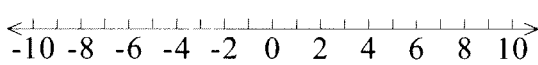
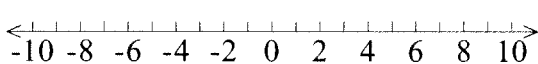

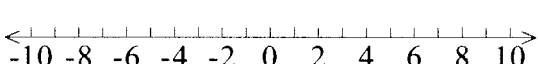






Student Application

Name: \_\_\_\_\_

Date: \_\_\_\_\_

Directions: Solve and graph the following inequalities.



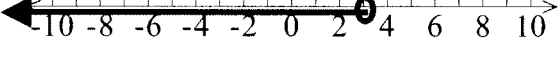

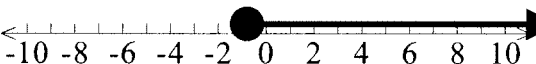

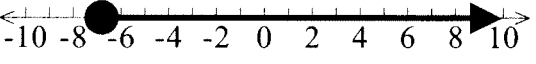
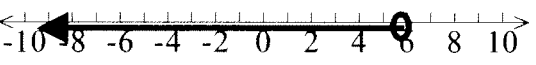

1. $y - 3 \leq -10$	
2. $n + 4 \geq 9$	
3. $8d < 24$	
4. $17 + r > 20$	
5. $c - 12 \geq -13$	
6. $5a < 20$	
7. $-63 + w \geq -70$	
8. $\frac{1}{3}q < 2$	
9. $11a < 44$	
10. $14 + r > 20$	

Student Application

Name: ANSWER KEY

Date: \_\_\_\_\_

Directions: Solve and graph the following inequalities.

1. $y - 3 \leq -10$	
2. $n + 4 \geq 9$	
3. $8d < 24$	
4. $17 + r > 20$	
5. $c - 12 \geq -13$	
6. $5a < 20$	
7. $-63 + w \geq -70$	
8. $\frac{1}{3}q < 2$	
9. $11a < 44$	
10. $14 + r > 20$	