

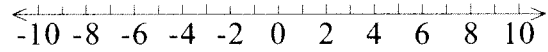
Graphing Inequalities

Name: _____

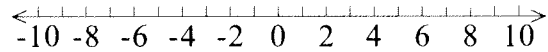
Date: _____

Directions: Graph the following inequalities.

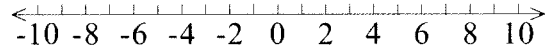
1. $f > 7$



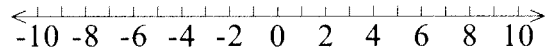
2. $m < 4$



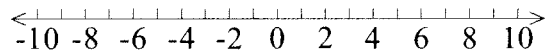
3. $a \geq -1$



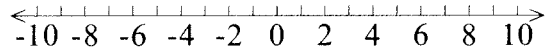
4. $z \leq 5$



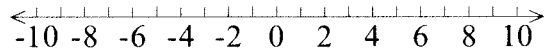
5. $6 \geq p$



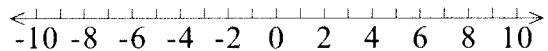
6. $c > -4$



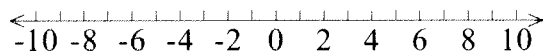
7. $k < -2$



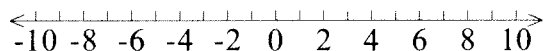
8. $x \geq 0$



9. $y < 9$



10. $-7 \leq q$



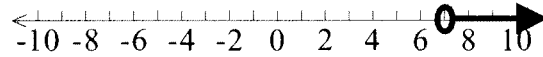
Graphing Inequalities

Name: ANSWER KEY

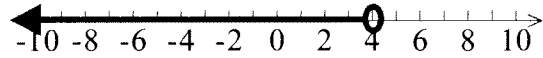
Date: _____

Directions: Graph the following inequalities.

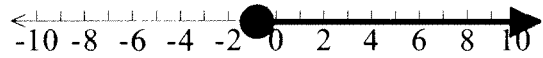
1. $f > 7$




2. $m < 4$



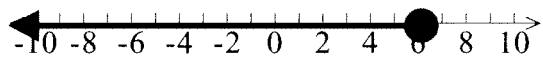
3. $a \geq -1$



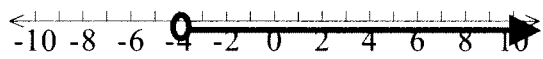
4. $z \leq 5$




5. $6 \geq p$



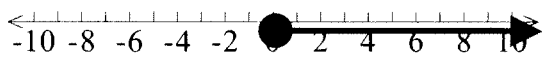
6. $c > -4$



7. $k < -2$



8. $x \geq 0$



9. $y < 9$



10. $-7 \leq q$

