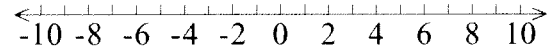


Graphing and Writing Inequalities
Exit Ticket

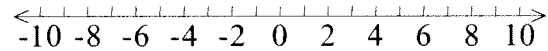
Name: _____
Date: _____

Graph the inequality.

1. $k \geq 2$

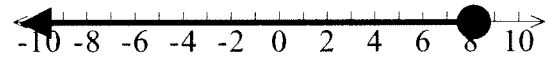


2. $4 > s$



Write the inequality represented by the graph given.

3. _____

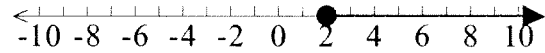


Graphing and Writing Inequalities
Exit Ticket

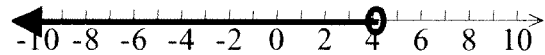
Name: ANSWER KEY
Date: _____

Graph the inequality.

1. $k \geq 2$



2. $4 > s$



Write the inequality represented by the graph given.

3. $x \leq 8$ _____

