


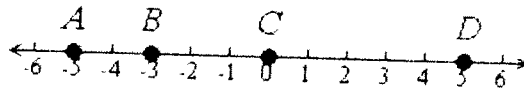
Integers: Identify and Compare

Name _____

1. Graph the following integers on the number line below: 3, -4, 6, -1



2. Identify the integers graphed on the number line.




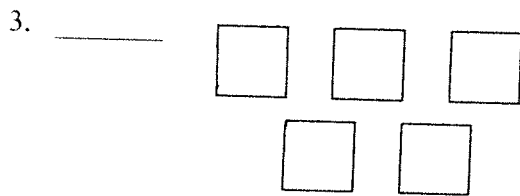
A = _____

B = _____

C = _____

D = _____

Identify the integers modeled by the Algebra Tiles drawn below.



Draw a model of each integer using Algebra Tiles.

5. -2

6. 12

7. 4

8. -9